

Combined Graduate Level Examination 2021 Tier - I

Roll Number	
Candidate Name	
Venue Name	
Exam Date	18/04/2022
Exam Time	9:00 AM - 10:00 AM
Subject	CGLE 2021 Tier I

Section : General Intelligence and Reasoning

Q.1 In a certain code, 6218 means 'Laptop is a computer' and 8217 means 'Computer is a machine'. Which of the following is the code for 'Machine makes our life easy'?

- Ans
- 1. 75344
 - 2. 75894
 - 3. 58795
 - 4. 76834

Question ID : 65497842571

Status : **Not Attempted and Marked For Review**

Chosen Option : --

Q.2 Six letters, D, d, E, e, F and f, are written on the different faces of a dice. Two positions of this dice are shown. Select the letter that will be on the face opposite to the face having the letter 'D'.



- Ans
- 1. E
 - 2. f
 - 3. e
 - 4. d

Question ID : 65497841979

Status : **Not Answered**

Chosen Option : --

Q.3 Nine employees, K, L, M, N, O, P, Q, R and S, are sitting in the office in a straight line, all facing the east. O is third to the right of M. K is third to the left of P. Q is between P and S. N is fourth to the right of M. P is to the immediate right of N. R is fourth to the left of O. Which of the following statements is NOT correct?

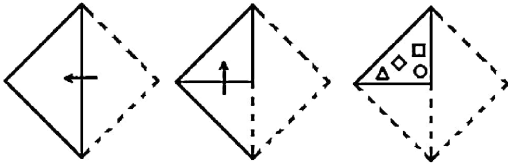
- Ans
- 1. R and S are sitting at the corners.
 - 2. L is sitting third to the left of O.
 - 3. Q is sitting fourth to the right of K.
 - 4. O is sitting between K and N.

Question ID : 65497843584


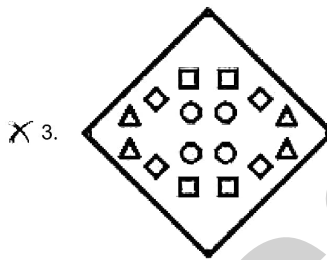
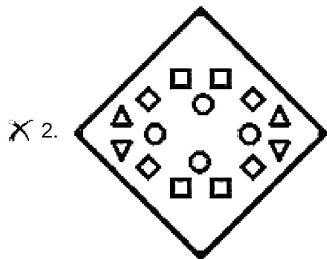
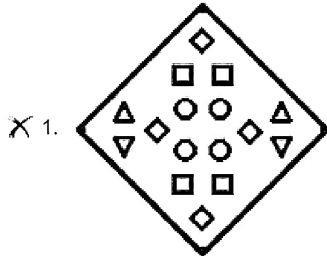
Status : **Not Answered**

Chosen Option : --

Q.4 The sequence of folding a piece of paper and the manner in which the folded paper has been cut is shown in the following figures. How would this paper look when unfolded?



Ans



Question ID : 65497844406

Status : Answered

Chosen Option : 4

Q.5 Four letter-clusters have been given, out of which three are alike in some manner and one is different. Select the one that is different.

- Ans 1. TWY
 2. GJM
 3. LOQ
 4. BEG

Question ID : 65497842567
Status : Answered
Chosen Option : 2

Q.6 Select the option that is related to the third term in the same way as the second term is related to the first term.

HARMONY : BMLGUDK :: RESOLVE : ?

- Ans 1. VEOIVHU
 2. OVEJUHV
 3. EVOJHVU
 4. VOEIUVH

Question ID : 65497844285
Status : Not Attempted and Marked For Review
Chosen Option : --

Q.7 In a certain code language, if ESTEEM is written as HWVHHP, then how will DOCTOR be written in the same code language?

- Ans 1. GRFWRU
 2. GRGVST
 3. FQEVQT
 4. HSGXSV

Question ID : 65497844628
Status : Answered
Chosen Option : 1

Q.8 If A denotes 'addition', B denotes 'multiplication', C denotes 'subtraction', and D denotes 'division', then what will be the value of the following expression?

66 A (132 D 12) C (4 A 3) B (15 D 5) A 16 B (-3)

- Ans 1. 8
 2. 10
 3. 6
 4. 56

Question ID : 65497843591
Status : Answered
Chosen Option : 1

Q.9 If '@' means 'addition', '%' means 'multiplication', '\$' means 'division', and '#' means 'subtraction', then find the value of the following expression.

$$23 @ 105 \$ 15 \% 6 \# 29$$

- Ans
- 1. 23
 - 2. 28
 - 3. 36
 - 4. 40

Question ID : 65497841976
Status : Answered
Chosen Option : 3

Q.10 Select the combination of letters that when sequentially placed in the blanks of the given series will complete the series.

g _ o _ d k _ m _ f _ o _ k k _ g f o _ d _ k m

- Ans
- 1. fokdodmok
 - 2. fokgodmok
 - 3. fokgodfok
 - 4. fokgodmom

Question ID : 65497844631
Status : Not Answered
Chosen Option : --

Q.11 Select the correct mirror image of the given figure when the mirror is placed at 'PQ' as shown.



- Ans
- 1.
 - 2.
 - 3.
 - 4.

Question ID : 65497843597
Status : Answered
Chosen Option : 2

Q.12 Select the letter-cluster from among the given options that can replace the question mark (?) in the following series.

RSX, NQW, JOV, FMU, ?

- Ans 1. BLT
 2. DKS
 3. CJS
 4. BKT

Question ID : 65497841959
Status : Answered
Chosen Option : 4

Q.13 Select the correct option that indicates the arrangement of the given words in a logical and meaningful order.

- 1.Core
- 2.Atmosphere
- 3.Universe
- 4.Surface
- 5.Galaxy

- Ans 1. 1, 4, 2, 5, 3
 2. 4, 3, 5, 2, 1
 3. 1, 4, 2, 3, 5
 4. 1, 3, 4, 5, 2

Question ID : 65497844634
Status : Answered
Chosen Option : 1

Q.14 Select the option that is related to the third number in the same way as the second number is related to the first number and the sixth number is related to the fifth number.

21 : 112 :: 36 : ? :: 51 : 272

- Ans 1. 192
 2. 252
 3. 72
 4. 198

Question ID : 65497844396
Status : Answered
Chosen Option : 1

Q.15 The average salary of the entire teaching staff in a college is ₹2,000 per day. The average salary of the male teachers is ₹2,500 and that of the female teachers is ₹1,200. If the number of male teachers is 16, then find the number of female teachers in the college.

- Ans 1. 12
 2. 10
 3. 18
 4. 14

Question ID : 65497844296
Status : Answered
Chosen Option : 2

Q.16 Study the given matrix carefully and select the number from among the given options that can replace the question mark (?) in it.

12 8 100
18 6 111
15 4 ?

- Ans 1. 102
 2. 108
 3. 62
 4. 78

Question ID : 65497842580
Status : Answered
Chosen Option : 3

Q.17 Read the given statements and conclusions carefully. Assuming that the information given in the statements is true, even if it appears to be at variance with commonly known facts, decide which of the given conclusions logically follow(s) from the statements.

Statements:
All bats are birds.
Some rats are bats.

Conclusions:
I. Some rats are birds.
II. Some birds are bats.
III. All rats are bats.

- Ans 1. Only conclusion II follows.
 2. Only conclusions I and II follow.
 3. Only conclusions I and III follow.
 4. Only conclusion I follows.

Question ID : 65497841969
Status : Answered
Chosen Option : 2

Q.18 Six letters A, B, C, D, E and F are written on different faces of a dice. Two positions of the same dice are shown. Select the letter that will be on the face opposite to the face having the letter 'C'.

A A
C F E D

- Ans 1. F
 2. D
 3. B
 4. E

Question ID : 65497844401
Status : Answered
Chosen Option : 4


Q.19 Select the number from among the given options that can replace the question mark (?) in the following series.

3, 11, 31, 69, 131, ?

- Ans 1. 152
 2. 163
 3. 198
 4. 223

Question ID : 65497842576
Status : Answered
Chosen Option : 4

Q.20 Select the figure from among the given options that can replace the question mark (?) in the following series.



Ans

- 1.
- 2.
- 3.
- 4.

Question ID : 65497843594
Status : Answered
Chosen Option : 1

Q.21 In a certain code language 'ROUBST' is coded as 61. How will 'FORTUNATE' be coded in that language?

- Ans 1. 124
 2. 114
 3. 141
 4. 142

Question ID : 65497844388
Status : Not Answered
Chosen Option : --

Q.22 Select the number from among the given options that can replace the question mark (?) in the following series.

58, 67, 83, 108, ?

- Ans 1. 178
 2. 157
 3. 139
 4. 144


Question ID : 65497841971
Status : Marked For Review
Chosen Option : 2

Q.23 Select the option in which the given figure is embedded (rotation is NOT allowed).




Ans


1.




2.



3.



4.

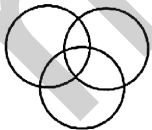


Question ID : 65497842586

Status : Answered

Chosen Option : 4

Q.24 Select the set of classes the relationship among which is best illustrated by the given Venn diagram.



Ans

1. Women, Gynaecologists, Doctors

2. Males, Females, Daughters

3. Entrepreneurs, Women, Philanthropists

4. Eatables, Plums, Fruits

Question ID : 65497844306

Status : Answered

Chosen Option : 3

Q.25 'A + B' means 'A is the daughter of B'.

'A \$ B' means 'A is the husband of B'.

'A @ B' means 'A is the brother of B'.

'A & B' means 'A is the mother of B'.

'A % B' means 'A is the son of B'.

If 'W @ S % K \$ G & U & T @ R + C', then which of the following statements is correct?

- Ans
- 1. G is the maternal grandmother of R.
 - 2. G is the father of W.
 - 3. C is the father-in-law of K.
 - 4. C is the wife of U.

Question ID : 65497843583
Status : Answered
Chosen Option : 1

Section : General Awareness

Q.1 The _____ festival of Sikkim is also known as Bhoomi Puja or Chandi Puja.

- Ans
- 1. Barahimizong
 - 2. Losar
 - 3. Indra Jatra
 - 4. Sakewa

Question ID : 65497841985
Status : Answered
Chosen Option : 1

Q.2 Which of the following is India's first Paperless Budget?

- Ans
- 1. Union Budget 2018-19
 - 2. Union Budget 2020-21
 - 3. Union Budget 2019-20
 - 4. Union Budget 2021-22

Question ID : 65497843604
Status : Answered
Chosen Option : 2

Q.3 Which of the following is a peninsular river?

- Ans
- 1. Brahmaputra
 - 2. Narmada
 - 3. Ganga
 - 4. Indus

Question ID : 65497843611
Status : Answered
Chosen Option : 2

Q.4 The Poona Pact of 1932 was an agreement between Mahatma Gandhi and _____.

- Ans** 1. BR Ambedkar
 2. Lord Irwin
 3. Aurobindo Ghose
 4. Bal Gangadhar Tilak

Question ID : 65497844424
Status : Answered
Chosen Option : 1

Q.5 Karishma Yadav was awarded the Vikram Award 2019 for _____ by the Government of Madhya Pradesh.

- Ans** 1. archery
 2. hockey
 3. shooting
 4. swimming

Question ID : 65497842007
Status : Not Answered
Chosen Option : --

Q.6 Who among the following is the author of the book 'Two Lives'?

- Ans** 1. Sudha Murty
 2. Arundhati Roy
 3. Chetan Bhagat
 4. Vikram Seth

Question ID : 65497844326
Status : Answered
Chosen Option : 3

Q.7 A bill becomes an Act of the Parliament after being passed by both the houses of Parliament and assented to by the _____.

- Ans** 1. Prime Minister
 2. Vice President
 3. President
 4. Speaker of the Lok Sabha

Question ID : 65497844428
Status : Answered
Chosen Option : 3

Q.8 Which of the following is the physical quantity for the expression arc/radius?

- Ans** 1. Surface tension
 2. Velocity
 3. Linear momentum
 4. Plane angle

Question ID : 65497844315
Status : Answered
Chosen Option : 4

Q.9 Which of the following statements about the 'Gotra' practice in ancient India is true?

- Ans** 1. Men and women were expected to marry within the same gotra.
2. People belonging to the same gotra were regarded as descendants of the person after whom the gotra was named.
3. Women retained their father's gotra after marriage.
4. Each gotra was named after a famous king.

Question ID : 65497841999
Status : Answered
Chosen Option : 2

Q.10 _____ is the measure of relative clarity of a liquid.

- Ans** 1. Turbidity
2. Conductivity
3. Composting
4. Reduction

Question ID : 65497844415
Status : Answered
Chosen Option : 1

Q.11 At a Regional Rural Bank, the share of the Government of India is _____.

- Ans** 1. 40%
2. 60%
3. 50%
4. 20%

Question ID : 65497844410
Status : Answered
Chosen Option : 1

Q.12 The Swachh Bharat Mission (SBM) was launched in the year _____ to fulfil the vision of cleaner India as a tribute to Mahatma Gandhi.

- Ans** 1. 2014
2. 2015
3. 2017
4. 2016

Question ID : 65497842596
Status : Answered
Chosen Option : 2

Q.13 Article _____ of the Constitution of India lays down the process for introducing changes in the Constitution.

- Ans**
- 1. 342
 - 2. 351
 - 3. 374
 - 4. 368

Question ID : 65497842612
Status : Answered
Chosen Option : 4

Q.14 Which of the following is NOT a water pollutant?

- Ans**
- 1. Silt
 - 2. Glacier
 - 3. Arsenic
 - 4. Chromium

Question ID : 65497844317
Status : Answered
Chosen Option : 2

Q.15 As per a list compiled by the United Nations Population Division, _____ is the world's fastest-growing city with a 44% increase in population between 2015 and 2020.

- Ans**
- 1. Malappuram
 - 2. Surat
 - 3. Kozhikode
 - 4. Jaipur

Question ID : 65497842603
Status : Not Answered
Chosen Option : --

Q.16 What is the power of 'second' in the SI unit of acceleration?

- Ans**
- 1. +1
 - 2. -1
 - 3. -2
 - 4. 0

Question ID : 65497843609
Status : Answered
Chosen Option : 3

Q.17 'Ponung' and 'Tapu' are popular dance forms from the state of _____ .

- Ans**
- 1. Chhattisgarh
 - 2. Arunachal Pradesh
 - 3. Goa
 - 4. Bihar

Question ID : 65497842590
Status : Answered
Chosen Option : 2

Q.18 Before being renamed, Mount Everest was simply known as _____.

- Ans
- 1. Peak IX
 - 2. Peak XV
 - 3. Peak XII
 - 4. Peak VI

Question ID : 65497841996
Status : Not Answered
Chosen Option : --

Q.19 Ferrum is the Latin name for _____ .

- Ans
- 1. nickel
 - 2. copper
 - 3. iron
 - 4. zinc

Question ID : 65497841989
Status : Answered
Chosen Option : 3

Q.20 According to the Economic Survey 2020-21, imports are expected to decline by _____ in the second half of FY21.

- Ans
- 1. 8.2%
 - 2. 11.3%
 - 3. 6.3%
 - 4. 5.4%

Question ID : 65497844310
Status : Answered
Chosen Option : 2

Q.21 With reference to the Money Bills in the Parliament, which of the following statements is INCORRECT?

- Ans
- 1. The Lok Sabha can either accept or reject all or any of the recommendations of the Rajya Sabha.
 - 2. It can be introduced only in the Lok Sabha.
 - 3. It can be rejected or amended by the Rajya Sabha.
 - 4. It can only be introduced by a minister and not by a private member.

Question ID : 65497843621
Status : Answered
Chosen Option : 3

Q.22 Who among the following is the author of the epic poem 'Kamayani'?

- Ans** 1. Jaishankar Prasad
 2. Gopala Sarana Sinha
 3. Mahadevi Varma
 4. Mahavir Prasad Dwivedi

Question ID : 65497843617
Status : Answered
Chosen Option : 3

Q.23 Who among the following wrote the novel 'The Great Gatsby'?

- Ans** 1. Chinua Achebe
 2. Harper Lee
 3. F Scott Fitzgerald
 4. Alice Walker

Question ID : 65497844426
Status : Not Answered
Chosen Option : --

Q.24 King Ajatashatru was a ruler of the _____ dynasty.

- Ans** 1. Haryanka
 2. Mauryan
 3. Shishunaga
 4. Nanda

Question ID : 65497842604
Status : Answered
Chosen Option : 1

Q.25 Los Angeles Clippers and Portland Trail Blazers are _____ teams.

- Ans** 1. Women's Tennis
 2. Men's Basketball
 3. Women's Hockey
 4. Men's Volleyball

Question ID : 65497844331
Status : Answered
Chosen Option : 2

Section : Quantitative Aptitude

Q.1

The value of $\frac{46 + \frac{3}{4} \text{ of } 32 - 6}{37 - \frac{3}{4} \text{ of } (34 + 6)}$ is:

Ans

1. $\frac{64}{7}$

2. $\frac{54}{7}$

3. $\frac{44}{7}$

4. $\frac{34}{7}$

Question ID : 65497844334

Status : Answered

Chosen Option : 1

Q.2 The greatest number that divides 126, 224 and 608 leaving remainders 2, 7 and 19, respectively, is:

Ans

1. 27

2. 31

3. 21

4. 37

Question ID : 65497844333

Status : Answered

Chosen Option : 2

Q.3 In the following figure, P and Q are centres of two circles. The circles are intersecting at points A and B. PA produced on both the sides meets the circles at C and D. If $\angle CPB = 100^\circ$, then find the value of x.



Ans

1. 115

2. 120

3. 110

4. 100

Question ID : 65497842024

Status : Answered

Chosen Option : 4

Q.4 A shopkeeper allows a 28% discount on the marked price of an article and still makes a profit of 30%. If he gains ₹39.90 on the sale of one article, then what is the marked price (to the nearest ₹) of the article?

- Ans**
- 1. 200
 - 2. 240
 - 3. 173
 - 4. 133

Question ID : 65497842821
Status : Answered
Chosen Option : 1

Q.5 If $(x^2 + \frac{1}{x^2}) = 23$, $x > 0$ What is the value of $(x^3 + \frac{1}{x^3}) = ?$

- Ans**
- 1. 140
 - 2. 110
 - 3. -110
 - 4. -140

Question ID : 65497844446
Status : Answered
Chosen Option : 2

Q.6 If $A = 60^\circ$, what is the value of:

$$\frac{[8 \cos A + 7 \sec A - \tan^2 A]}{10 \sin \frac{A}{2}} ?$$

- Ans**
- 1. 5
 - 2. 3
 - 3. 15
 - 4. 10

Question ID : 65497843644
Status : Answered
Chosen Option : 2

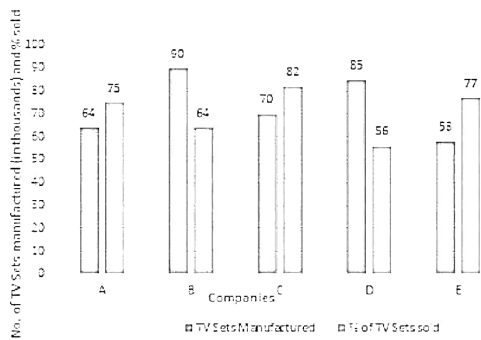
Q.7 Two poles of heights 10 m and 17 m are fixed to a level ground. The distance between the bottom of the poles is 24 m. What is the distance (in m) between their tops?

- Ans**
- 1. 25
 - 2. 24
 - 3. 30
 - 4. 27

Question ID : 65497844449
Status : Answered
Chosen Option : 1

Q.8 The given bar chart represents the Televisions Sets (TV) manufactured (in thousands) and the respective percentage of those TV Sets sold by five different companies A, B, C, D and E in 2015.

Study the chart carefully and answer the question that follows.



What is the ratio of the number of TV sets sold by company A to that of company B in 2015?

- Ans**
- 1. 6 : 5
 - 2. 4 : 5
 - 3. 5 : 4
 - 4. 5 : 6

Question ID : 65497843143
Status : Answered
Chosen Option : 4

Q.9 A circle is inscribed in $\triangle ABC$, touching AB, BC and AC at the points P, Q and R, respectively. If $AB - BC = 4$ cm, $AB - AC = 2$ cm, and the perimeter of $\triangle ABC = 32$ cm, then AC (in cm) = ?

- Ans**
- 1. $\frac{35}{3}$
 - 2. $\frac{38}{3}$
 - 3. $\frac{32}{3}$
 - 4. $\frac{26}{3}$

Question ID : 65497842629
Status : Answered
Chosen Option : 3

Q.10 If $a + b - c = 5$ and $ab - bc - ac = 10$, then find the value of $a^2 + b^2 + c^2$.

- Ans**
- 1. 40
 - 2. 5
 - 3. 45
 - 4. 15

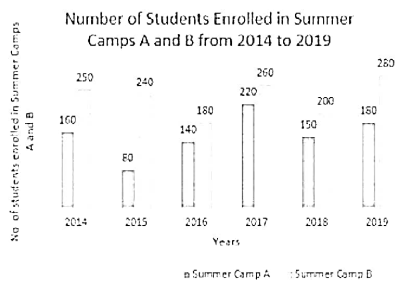
Question ID : 65497843637
Status : Answered
Chosen Option : 2

Q.11 The sum of three numbers is 98. If the ratio of the first to the second is 2 : 3 and that of the second to the third is 5 : 8, then the third number is:

- Ans**
- 1. 30
 - 2. 20
 - 3. 49
 - 4. 48

Question ID : 65497844440
Status : Answered
Chosen Option : 4

Q.12 The following bar chart shows the number of students enrolled in two Summer Camps A and B from 2014 to 2019. Study the chart carefully and answer the question that follows.



What is the ratio of the students enrolled in Camp A in 2014, 2016 and 2017 to the students enrolled in Camp B in 2015, 2018 and 2019?

- Ans**
- 1. 18 : 13
 - 2. 22 : 15
 - 3. 13 : 18
 - 4. 15 : 22

Question ID : 65497843042
Status : Answered
Chosen Option : 3

Q.13 What is the amount (in ₹) of a sum of ₹32,000 at 20% per annum for 9 months, compounded quarterly?

- Ans**
- 1. 37,044
 - 2. 35,087
 - 3. 32,000
 - 4. 30,876

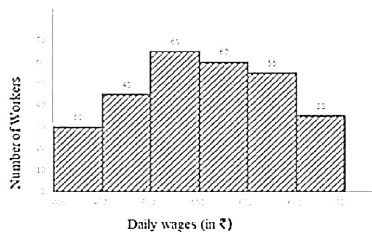
Question ID : 65497842623
Status : Answered
Chosen Option : 1

Q.14 Exactly midway between the foot of two towers P and Q, the angles of elevation of their tops are 45° and 60° , respectively. The ratio of the heights of P and Q is:

- Ans**
- 1. $1 : \sqrt{3}$
 - 2. $3 : 1$
 - 3. $1 : 3$
 - 4. $\sqrt{3} : 1$

Question ID : 65497844352
Status : Answered
Chosen Option : 1

Q.15 Study the given histogram and answer the question that follows.



What is the difference between the total number of workers whose daily wages are less than ₹450 and the total number of workers whose daily wages are ₹650 and above?

- Ans**
- 1. 4
 - 2. 8
 - 3. 10
 - 4. 5

Question ID : 65497842639
Status : Answered
Chosen Option : 4

Q.16 A shopkeeper bought a table for ₹4,600 and a chair for ₹1,800. He sells the table with 10% gain and the chair with 6% gain. Find the overall gain percentage.

- Ans**
- 1. $7\frac{3}{4}$
 - 2. $8\frac{7}{8}$
 - 3. 8
 - 4. 16

Question ID : 65497843631
Status : Answered
Chosen Option : 2

Q.17 Find the greatest number $234a5b$, which is divisible by 22, but NOT divisible by 5.

- Ans
- 1. 234058
 - 2. 234850
 - 3. 234652
 - 4. 234751

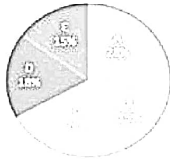
Question ID : 65497842009
Status : Answered
Chosen Option : 3

Q.18 The price of an item is reduced by 20%. As a result, customers can get 2 kg more of it for ₹360. Find the original price (in ₹) per kg of the item.

- Ans
- 1. 40
 - 2. 45
 - 3. 48
 - 4. 36

Question ID : 65497842014
Status : Answered
Chosen Option : 2

Q.19 The given pie chart shows the percentage of students in five schools and the table shows the ratio of boys and girls in each school. Study the pie chart and table and answer the question that follows.



The below table shows the ratio of girls and boys in the given five schools.

School	Girls	Boys
A	3	4
B	2	2
C	5	1
D	1	2
E	2	1

What is the ratio of the number of boys in school C to the number of girls in school E?

- Ans
- 1. 4 : 3
 - 2. 1 : 2
 - 3. 3 : 4
 - 4. 2 : 1

Question ID : 65497844354
Status : Answered
Chosen Option : 3

Q.20 If $\sec^2 \theta + \tan^2 \theta = 3\frac{1}{2}$, $0^\circ < \theta < 90^\circ$, then $(\cos\theta + \sin\theta)$ is equal to

Ans

1. $\frac{1+\sqrt{5}}{3}$
2. $\frac{2+\sqrt{5}}{3}$
3. $\frac{1+\sqrt{5}}{6}$
4. $\frac{9+2\sqrt{5}}{6}$

Question ID : 65497844451

Status : Answered

Chosen Option : 2

Q.21 Shyam drives his car 30 km at a speed of 45 km/h and, for the next 1 h 20 m, he drives it at a speed of 51 km/h. Find his average speed (in km/h) for the entire journey.

Ans

1. 49
2. 48
3. 48.5
4. 47

Question ID : 65497843426

Status : Answered

Chosen Option : 1

Q.22 In a $\triangle ABC$, the bisector of $\angle A$ meets BC at D . If $AB = 9.6$ cm, $AC = 11.2$ cm and $BD = 4.8$ cm, the perimeter (in cm) of $\triangle ABC$ is:

Ans

1. 30.4
2. 28.6
3. 31.2
4. 32.8

Question ID : 65497843642

Status : Answered

Chosen Option : 3

Q.23 A hemispherical depression of diameter 4 cm is cut out from each face of a cubical block of sides 10 cm. Find the surface area of the remaining solid (in cm^2).

(Use $\pi = \frac{22}{7}$)

Ans

1. $900\frac{4}{7}$

2. $112\frac{4}{7}$

3. $675\frac{3}{7}$

4. $713\frac{1}{7}$

Question ID : 65497843434

Status : Answered

Chosen Option : 3

Q.24 A man, a woman and a boy can complete a work in 3, 4 and 12 days, respectively. How many boys must assist one man and one woman to complete the same work in one day?

Ans

1. 5

2. 7

3. 4

4. 9

Question ID : 65497843634

Status : Answered

Chosen Option : 1

Q.25 A boat can cover a distance of 56 km downstream in 3.5 hours. The ratio of the boat in still water and the speed of stream is 3 : 1. How much time (in hours) will the boat take to cover a distance of 41.6 km downstream?

Ans

1. 2.1

2. 1.5

3. 2.6

4. 1.8

Question ID : 65497844443

Status : Answered

Chosen Option : 3

Section : English Comprehension

Q.1 Select the most appropriate option that can substitute the underlined segment in the given sentence. If there is no need to substitute it, select 'No substitution required'.

This TV channel has a larger viewership from another channel.

- Ans**
- 1. from the other channel
 - 2. than any other channel
 - 3. No substitution required
 - 4. from any other channel

Question ID : 65497842047
Status : Answered
Chosen Option : 2

Q.2 Select the option that can be used as a one-word substitute for the given group of words.

One who can read and write

- Ans**
- 1. Illiterate
 - 2. Literate
 - 3. Eligible
 - 4. Illegible

Question ID : 65497844480
Status : Answered
Chosen Option : 2

Q.3 Select the most appropriate synonym of the given word.

FINAL

- Ans**
- 1. Former
 - 2. Allowed
 - 3. Forbidden
 - 4. Concluding

Question ID : 65497844373
Status : Answered
Chosen Option : 4

Q.4 Select the option that expresses the given sentence in passive voice.

Who is creating this mess?

- Ans**
- 1. By whom is this mess being created?
 - 2. Who has created this mess?
 - 3. By whom has this mess been created?
 - 4. By whom this mess being created?

Question ID : 65497844463
Status : Answered
Chosen Option : 1

Q.5 Select the option that expresses the given sentence in indirect speech.

Ajay says, "There is going to be a snowfall."

- Ans 1. Ajay says that there was going to be a snowfall.
 2. Ajay says that there is going to be a snowfall.
 3. Ajay said that there is going to be a snowfall.
 4. Ajay said that there was going to be a snowfall.

Question ID : 65497842652
Status : Answered
Chosen Option : 2

Q.6 Select the most appropriate ANTONYM of the given word.

Exonerate

- Ans 1. Exempt
 2. Absolve
 3. Engage
 4. Acquit

Question ID : 65497842659
Status : Answered
Chosen Option : 3

Q.7 Select the most appropriate option to fill in the blank.

You will find it difficult _____ but later you will get used to wearing a mask.

- Ans 1. on first
 2. at first
 3. firstly
 4. at the first

Question ID : 65497843675
Status : Answered
Chosen Option : 2

Q.8 Select the most appropriate ANTONYM of the given word.

Obscure

- Ans 1. Blurred
 2. Apparent
 3. Cloudy
 4. Veiled

Question ID : 65497842052
Status : Answered
Chosen Option : 2

Q.9 The following sentence has been divided into parts. One of them contains an error.
Select the part that contains the error from the given options.

It has / been raining / since / two hours.

- Ans** 1. since
 2. been raining
 3. It has
 4. two hours

Question ID : 65497844460
Status : Answered
Chosen Option : 1

Q.10 Select the most appropriate synonym of the given word.

Squawk

- Ans** 1. Suggest
 2. Explore
 3. Scream
 4. Connote

Question ID : 65497844475
Status : Answered
Chosen Option : 3

Q.11 Select the most appropriate option that can substitute the underlined segment in the given sentence. If there is no need to substitute it, select 'No substitution required'.

In spite of my niece's dog Casper is very mischievous, he is lovable.

- Ans** 1. Nevertheless my niece
 2. No substitution required
 3. Although my niece's
 4. However my nieces

Question ID : 65497844371
Status : Answered
Chosen Option : 3

Q.12 Sentences of a paragraph are given below in jumbled order. Arrange the sentences in the correct order to form a meaningful and coherent paragraph.

- A. Firstly, it provides air for respiration, serves the sense of smell and conditions the air by filtering, warming and moistening it.
- B. The nose is the prominent structure between the eyes that serves as the entrance to the respiratory tract.
- C. For inhalation it has two cavities, separated from one another by a wall of cartilage called the septum.
- D. Apart from filtering the air, it also cleans itself of foreign debris extracted from inhalations.

- Ans**
- 1. BACD
 - 2. ACDB
 - 3. BADC
 - 4. DBCA

Question ID : 65497844372

Status : Answered

Chosen Option : 3

Q.13 The following sentence has been divided into parts. One of them may contain an error. Select the part that contains the error from the given options. If you don't find any error, mark 'No error' as your answer.

Every Saturday, / the workers gets / their weekly wages.

- Ans**
- 1. their weekly wages
 - 2. the workers gets
 - 3. Every Saturday
 - 4. No error

Question ID : 65497842034

Status : Answered

Chosen Option : 2

Q.14 Select the correctly spelt word.

- Ans**
- 1. Convert
 - 2. Conect
 - 3. Concent
 - 4. Convect

Question ID : 65497844482

Status : Answered

Chosen Option : 1

Q.15 Select the most appropriate meaning of the given idiom.

Cool as a cucumber

- Ans**
- 1. Nervous and fidgety
 - 2. Irritated and annoyed
 - 3. Calm and composed
 - 4. Happy and excited

Question ID : 65497842054

Status : Answered

Chosen Option : 3

Q.16 Select the option that expresses the given sentence in passive voice.

The judge found the prisoner guilty.

- Ans** 1. The prisoner had been found guilty by the judge.
 2. The prisoner was found guilty by the judge.
 3. The judge was found guilty by the prisoner.
 4. The prisoner has been found guilty by the judge

Question ID : 65497844361
Status : Answered
Chosen Option : 2

Q.17 Select the most appropriate meaning of the given idiom.

A hair in the butter

- Ans** 1. Easy to handle
 2. A slippery road
 3. Sinking in debt
 4. A challenging situation

Question ID : 65497842661
Status : Answered
Chosen Option : 3

Q.18 Select the option that can be used as a one-word substitute for the given group of words.

Drawings or writing on a wall in a public place

- Ans** 1. Portrait
 2. Caricature
 3. Graffiti
 4. Collage

Question ID : 65497843673
Status : Answered
Chosen Option : 3

Q.19 The following sentence has been split into four segments. Identify the segment that contains a grammatical error.

The contrast between / Britain and other countries / of Europe / are striking.

- Ans** 1. The contrast between
 2. are striking
 3. Britain and other countries
 4. of Europe

Question ID : 65497842643
Status : Answered
Chosen Option : 2

Q.20 Select the most appropriate option that can substitute the underlined segment in the given sentence. If there is no need to substitute it, select 'No substitution required'.

Which movie have you watched on television when I called you?

- Ans**
- 1. No substitution required
 - 2. were you watching
 - 3. did you watched
 - 4. are you watching

Question ID : 65497844156
Status : Answered
Chosen Option : 2

Comprehension:

In the following passage, some words have been deleted. Read the passage carefully and select the most appropriate option to fill in each blank.

The camel and the fox were very good friends and very good thieves. One day, the two friends (1) _____ to cross the river so that they could travel to a (2) _____ farm to steal food. The small fox (3) _____ swim, so the camel said to his friend, 'Climb (4) _____ onto my back and I will swim across the (5) _____.'

SubQuestion No : 21

Q.21 Select the most appropriate option to fill in blank number 1.

- Ans**
- 1. deciding
 - 2. will decide
 - 3. decided
 - 4. are decide

Question ID : 65497843657
Status : Answered
Chosen Option : 3

Comprehension:

In the following passage, some words have been deleted. Read the passage carefully and select the most appropriate option to fill in each blank.

The camel and the fox were very good friends and very good thieves. One day, the two friends (1) _____ to cross the river so that they could travel to a (2) _____ farm to steal food. The small fox (3) _____ swim, so the camel said to his friend, 'Climb (4) _____ onto my back and I will swim across the (5) _____.'

SubQuestion No : 22

Q.22 Select the most appropriate option to fill in blank number 2.

- Ans**
- 1. nearby
 - 2. near
 - 3. nearest
 - 4. nearly

Question ID : 65497843658
Status : Answered
Chosen Option : 1

Comprehension:

In the following passage, some words have been deleted. Read the passage carefully and select the most appropriate option to fill in each blank.

The camel and the fox were very good friends and very good thieves. One day, the two friends (1) _____ to cross the river so that they could travel to a (2) _____ farm to steal food. The small fox (3) _____ swim, so the camel said to his friend, 'Climb (4) _____ onto my back and I will swim across the (5) _____.'

SubQuestion No : 23**Q.23** Select the most appropriate option to fill in blank number 3.

- Ans 1. ought to
 2. may not
 3. might
 4. could not

Question ID : 65497843659

Status : Answered

Chosen Option : 4

Comprehension:

In the following passage, some words have been deleted. Read the passage carefully and select the most appropriate option to fill in each blank.

The camel and the fox were very good friends and very good thieves. One day, the two friends (1) _____ to cross the river so that they could travel to a (2) _____ farm to steal food. The small fox (3) _____ swim, so the camel said to his friend, 'Climb (4) _____ onto my back and I will swim across the (5) _____.'

SubQuestion No : 24**Q.24** Select the most appropriate option to fill in blank number 4.

- Ans 1. over
 2. across
 3. up
 4. above

Question ID : 65497843660

Status : Answered

Chosen Option : 3

Comprehension:

In the following passage, some words have been deleted. Read the passage carefully and select the most appropriate option to fill in each blank.

The camel and the fox were very good friends and very good thieves. One day, the two friends (1) _____ to cross the river so that they could travel to a (2) _____ farm to steal food. The small fox (3) _____ swim, so the camel said to his friend, 'Climb (4) _____ onto my back and I will swim across the (5) _____.'

SubQuestion No : 25**Q.25** Select the most appropriate option to fill in blank number 5.

- Ans 1. sea
 2. ocean
 3. lake
 4. river

Question ID : 65497843661

Status : Answered

Chosen Option : 4

mpcareer.in